

Compare number sentences



- 1 Mo has 4 blue sweets and 3 pink sweets.



Rosie has 4 blue sweets and 5 pink sweets.




Who has more sweets? _____

Explain how you know.



- 2 Colour the bar models to show that
 $3 + 6 = 8 + 1$




Write one more calculation that gives the same answer.

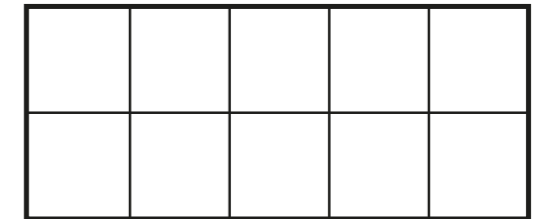

Compare answers with a partner.



- 3 Draw counters to show $9 + 3$



Draw counters to show $9 + 4$



Write $<$, $>$ or $=$ to make the statement correct.



$$9 + 3 \bigcirc 9 + 4$$

- 4 Write $<$, $>$ or $=$ to make the statements correct.

a) $3 + 5 \bigcirc 3 + 9$

b) $7 + 2 \bigcirc 4 + 2$

c) $10 + 5 \bigcirc 9 + 6$



, f,, • • •

† ‡ %₀ ○ † ‡ %₀•

•... %₀ ○ • %₀

•• %₀ ○ • † %₀

