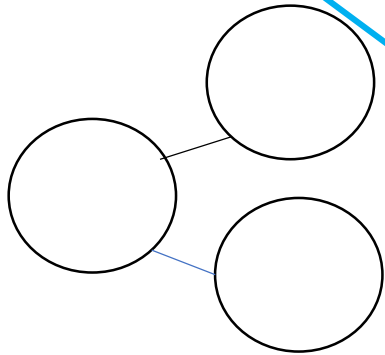
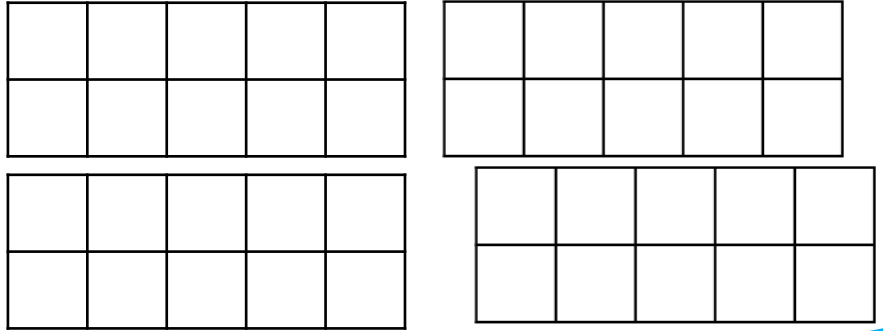


Base ten



Part whole

Ten frames




Tally

Different ways  
to show the number:

35

Draw it

1 more & 1 less box



Word

Numeral

Can you systematically write calculations at give the total of the number of the week?

0	+	35	=	35
1	+	34	=	35