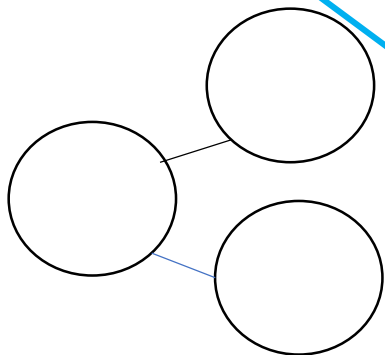
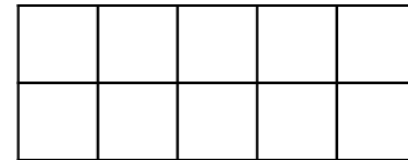
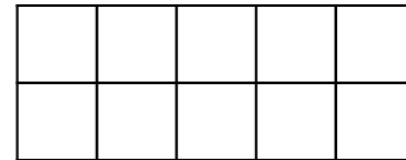
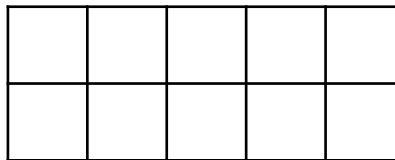


Base ten



Part whole

Ten frames




Tally

Different ways
to show the number:

40

Draw it

1 more & 1 less box



Word

Numeral

Can you systematically write calculations at give the total of the number of the week?

$$0 + 40 = 40$$

$$1 + 39 = 40$$