

Wednesday 2nd December

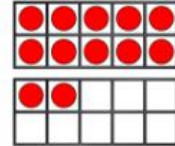
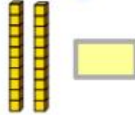
WALT: represent numbers in tens and ones

Warm Up

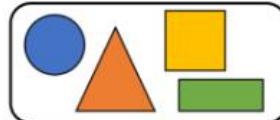
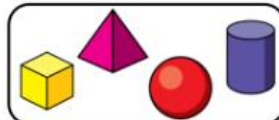
Flashback 4

Year 1 | Week 10 | Day 4

1) What number is this?



2) How have these shapes been sorted?



3) Use $<$ or $>$ to compare.

$5 + 4$ 10

4) What is double 5?

White
Rose
Maths



Wednesday 2nd December

WALT: represent numbers in tens and ones



Can you help Buddy know his teen numbers?

a) How many apples are there?



There is ten and ones.

There are apples.

Wednesday 2nd December

WALT: represent numbers in tens and ones



How many tens and ones?

b) How many bees are there?



There is ten and ones.

There are bees.

Wednesday 2nd December

WALT: represent numbers in tens and ones



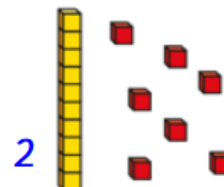
How many tens and ones?

3 Match the number sentences to the pictures.

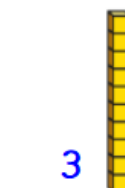
a 1 ten and 7 ones



b 1 ten and 1 one



c 1 ten and 8 ones



Wednesday 2nd December

WALT: represent numbers in tens and ones



Can you help Buddy complete the sentences?

4 Complete the sentences.

a) 1 ten and 6 ones =

b) = 1 ten and 3 ones

c) 15 = ten and ones

d) 2 tens =

e) 1 ten and 10 ones =

Wednesday 2nd December

WALT: represent numbers in tens and ones



Today's activity is to help Buddy know how to show numbers in tens and ones.

2.12.20 WALT: read and write numbers to 20

Can you fill out any missing boxes for each of the numbers below? The first one has been done for you to show you what to do.



Numerals	Number in Words	Tens	Ones	Illustration
20	twenty	2	0	
17	seventeen			
9				
	two	0	2	
		1	5	
4				
	eleven			
		0	7	

Challenge!

Can you draw any numbers from 20 to 30 as tens and ones?