

Friday 4th December

WALT: compare groups of objects

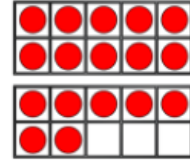
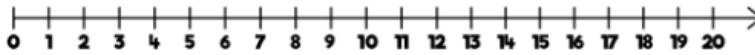


Warm Up

Flashback 4


Year 1 | Week 11 | Day 1

1) One more than 10 is



2) Complete the number track.



3) What shape is this? 

4) What is double 6?

White Rose Maths

Friday 4th December

WALT: compare groups of objects



How many sweets does Annie and Tommy have each?



Annie and Tommy have these sweets.



Annie



Tommy



Friday 4th December

WALT: compare groups of objects



Most and least



Annie and Tommy have these sweets.



Annie



Tommy



a) Who has the least sweets? _____

Complete the sentence.

is less than

b) Who has the most sweets? _____

Complete the sentence.

is more than

Friday 4th December

WALT: compare groups of objects



How many cookies do
Teddy and Amir have?

Teddy and Amir have these cookies.

Teddy      



Amir          

Who has the most cookies? _____

How do you know?

Complete the sentence.

is more than



Friday 4th December

WALT: compare groups of objects

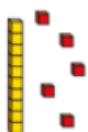
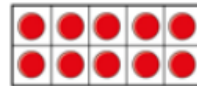
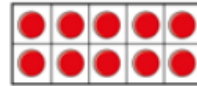


Greater or less?

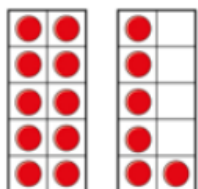
Write greater or less to complete the statements.





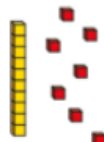
is _____ than



is _____ than



is _____ than



Friday 4th December

WALT: compare groups of objects



4.12.20 WALT use the greater and less than symbol

Greater Than or Less Than

Count the winter-themed objects in each box. Then, draw the correct symbol in the middle box to show which is greater. Remember - the crocodile always wants to eat the bigger number. The first one has been done for you.



 8	<	 12
 8		 12
 8		 12
 8		 12
 8		 12
 8		 12
 8		 12
 8		 12

Today's activity is to count the groups of objects and then use the greater than and less than symbols to compare the groups.

