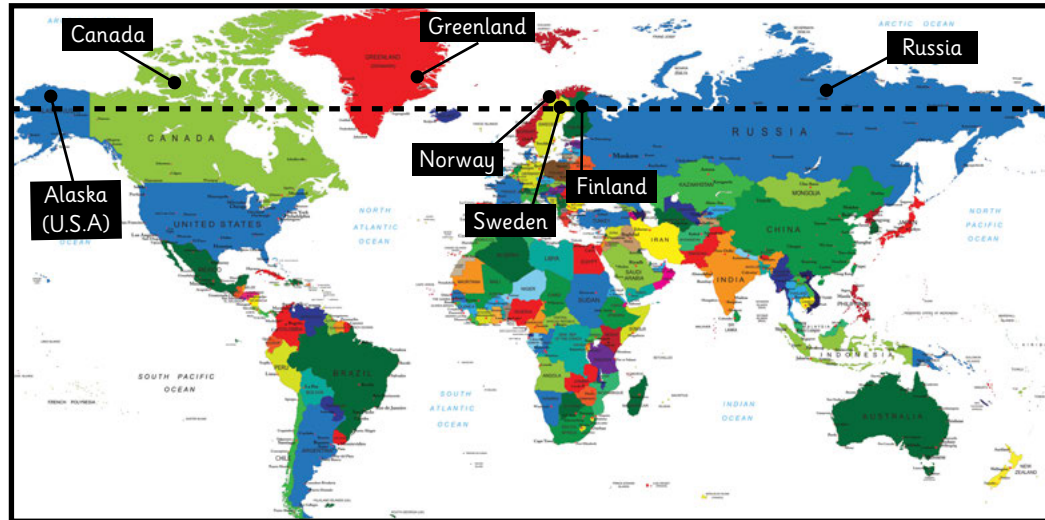


# Let's go to the Arctic

## Arctic Circle Map



The dotted lines show the position of the Arctic Circle. There are seven countries in the Arctic Circle.



Alaska  
(U.S.A)



Canada



Greenland



Norway



Sweden



Finland



Russia



Can you see these countries on the two maps? Look closely at their flags.

Name: \_\_\_\_\_ Date: \_\_\_\_\_


Alaska




Canada




Greenland




Norway




Finland




Sweden



Russia



Can you draw your country's flag?



Can you trace the names of the countries in the Arctic Circle? Can you use the Arctic Circle map to draw and colour their flags?



Name: \_\_\_\_\_ Date: \_\_\_\_\_

Alaska



Russia





Canada



Greenland

Finland



Cut out these cards. Match the name, picture and flag together and glue them to a blank piece of paper.



Norway



Sweden



Can you remember what each country looks like?

Name: \_\_\_\_\_ Date: \_\_\_\_\_



Use the Arctic Circle Map to help you colour the countries that are partly inside the Arctic Circle. Can you answer the questions?

How many countries are in the Arctic Circle?

Which country is between Norway and Finland?

Which country is next to Alaska?


Is Africa in the Arctic Circle?




This is the Swedish flag.  
Northern Sweden is in the  
Arctic Circle.



This is the Russian flag.  
Northern Russia is in the  
Arctic Circle.




This is the Qaanaaq,  
Greenland.  
It is in the Arctic Circle.




This is the Swedish flag.  
Northern Sweden is in the  
Arctic Circle.



This is the Russian flag.  
Northern Russia is in the  
Arctic Circle.



This is the Qaanaaq,  
Greenland.  
It is in the Arctic Circle.







This is the Canadian flag.  
Northern Canada is in the  
Arctic Circle.



This is Tromso, Norway.  
It is in the Arctic Circle.




This is Barrow, Alaska.  
It is in the Arctic Circle.




This is the Canadian flag.  
Northern Canada is in the  
Arctic Circle.




This is Tromso, Norway.  
It is in the Arctic Circle.



This is Barrow, Alaska.  
It is in the Arctic Circle.



This is the Greenlandic flag.  
Northern Greenland is in the  
Arctic Circle.




The Arctic stretches over 5.4  
million square miles.



The Arctic has many icebergs  
and lots of snow.



This is the Greenlandic flag.  
Northern Greenland is in the  
Arctic Circle.



The Arctic stretches over 5.4  
million square miles.



The Arctic has many icebergs  
and lots of snow.



People dress in warm clothes if they live in the Arctic.



The Arctic Circle is in the Northern Hemisphere.



The North Pole is inside the Arctic Circle.



People dress in warm clothes if they live in the Arctic.



The Arctic Circle is in the Northern Hemisphere.



The North Pole is inside the Arctic Circle.





Inuit is the name for the native Arctic people.



The Arctic is frozen for most of the year.



Polar bears live in the Arctic.  
They eat seals and fish.



Inuit is the name for the native Arctic people.



The Arctic is frozen for most of the year.




Polar bears live in the Arctic.  
They eat seals and fish.



Name: \_\_\_\_\_ Date: \_\_\_\_\_


Alaska



Canada



Greenland



Norway



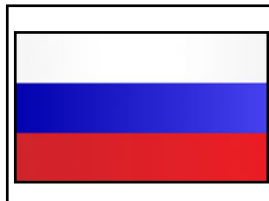
Finland



Sweden



Russia

















Can you draw your country's flag?



Can you trace the names of the countries in the Arctic Circle? Can you use the Arctic Circle map to draw and colour their flags?



Name: \_\_\_\_\_ Date: \_\_\_\_\_

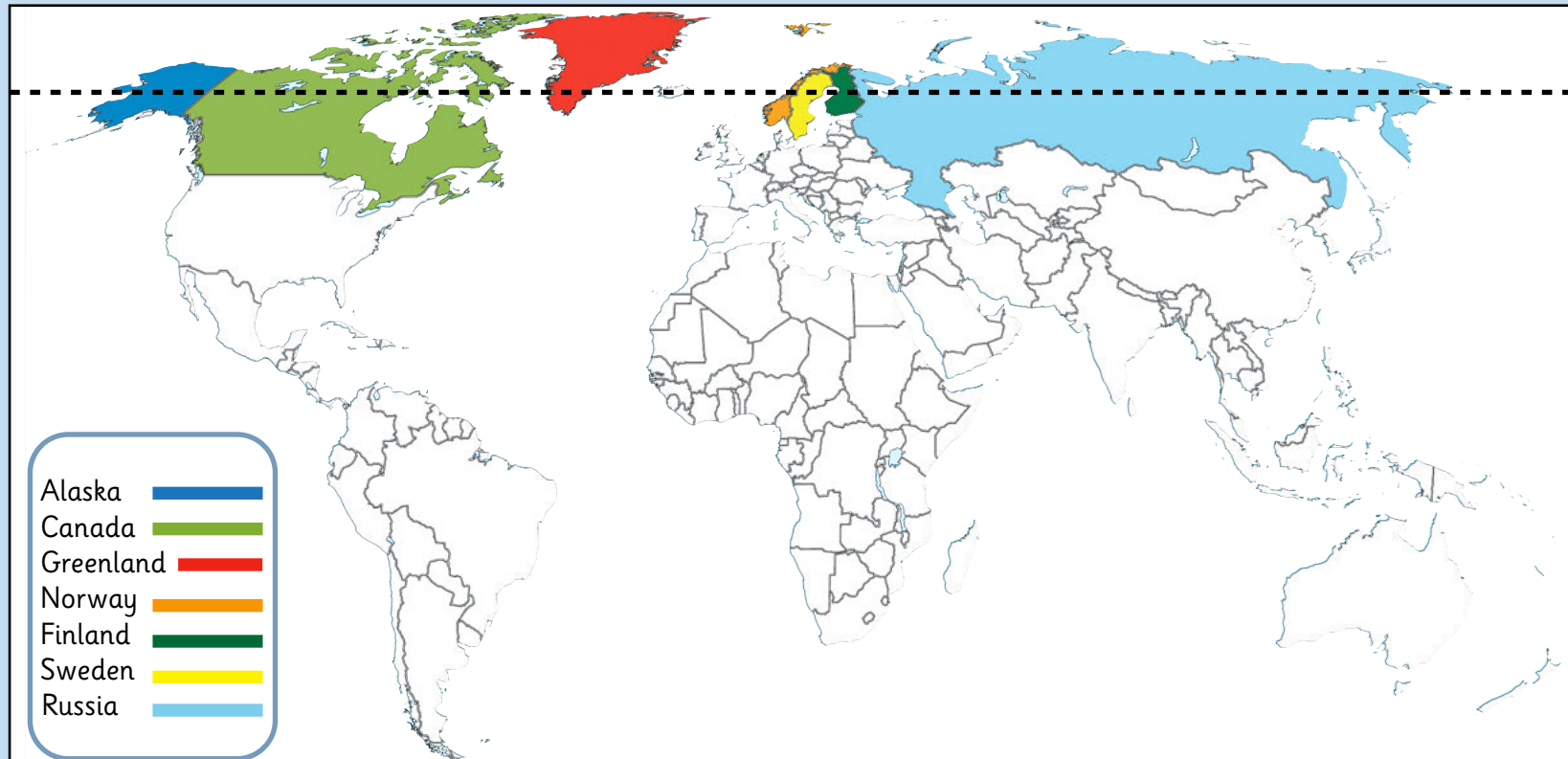
Alaska		
Canada		
Greenland		
Finland		
Russia		
Norway		
Sweden		

Cut out these cards. Match the name, picture and flag together and glue them to a blank piece of paper.



Can you remember what each country looks like?

Name: \_\_\_\_\_ Date: \_\_\_\_\_



How many countries  
are in the Arctic Circle?

Seven

Which country is between  
Norway and Finland?

Sweden

Which country is  
next to Alaska?

Canada

Is Africa in the  
Arctic Circle?

No

Use the  
Arctic Circle  
Map to help  
you colour  
the countries  
that are  
partly inside  
the Arctic  
Circle.  
Can you  
answer the  
questions?

