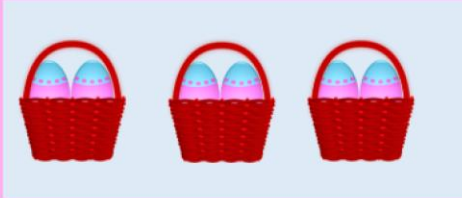


Who can remember what equal means?

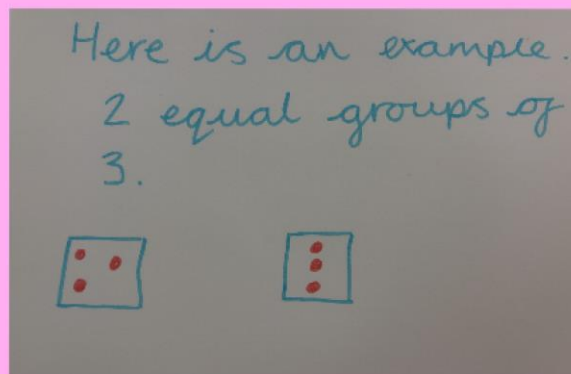


Are these in equal or unequal groups?



On a piece of paper can you draw:

- 4 equal groups of 5
- 3 equal groups of 2
- 2 equal groups of 5



What does total mean?

What is the total of the groups for each of the questions above?

Wednesday 6th January 2021

WALT: add equal groups

How many mangoes are there? Complete the sentences.




➤ $5 + 5 + 5 =$



➤ There are _____ mangoes.


➤ There are _____ groups of _____ mangoes, which is equal to _____.



Tuesday 5th January 2021

WALT: add equal groups

How many marbles are there? Complete the sentences.



There are _____ equal groups of _____. The total number of marbles is _____.

Wednesday 6th January 2021

WALT: add equal groups

James loves sweets!

Whose tubs should he choose?

I will give him 5
tubs of 2 sweets.



I will give him 3
tubs of 5 sweets.

