

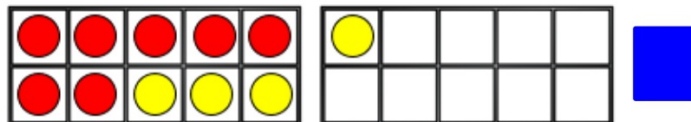
Thursday 7th January

WALT: *add by counting on*

Flashback 4

Year 1 | Week 1 | Day 2

1) Work out $7 + 4$



2) What is $6 + 4$?

3) Write the number **seventeen** in numerals.

4) Name the shape.



Thursday 7th January

WALT: add by counting on

Which calculations are correct?

1 $6 + 4 = 10$

2 $17 + 3 = 20$

3 $11 + 8 = 20$

4 $5 + 4 = 10$

5 $12 + 8 = 20$

6 $15 + 5 = 10$



Thursday 7th January

WALT: add by counting on

Today we are going to learn to
add by counting on

Roxy starts on 13.

She counts on 2.

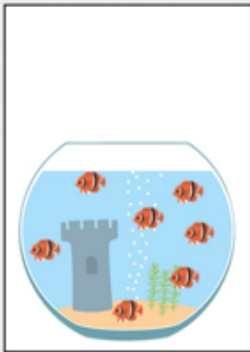

10	11	12	13	14	15	16	17	18	19	20
----	----	----	----	----	----	----	----	----	----	----

What number will she land on?

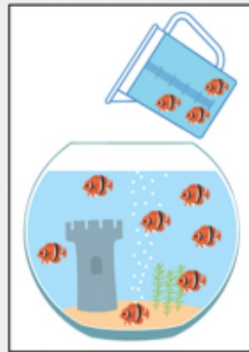
Thursday 7th January

WALT: *add by counting on*

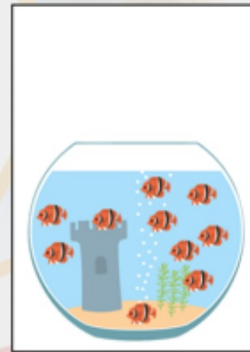
True or false?



1. There were
7 fish in the
bowl.



2. 3 more are
added.

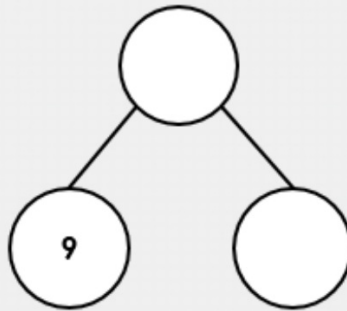


3. Now there
are 10 fish in
the bowl.

Thursday 7th January

WALT: *add by counting on*

Use the sentences to help you fill in the part whole model.



At the start of the day there were 9 puppies.

Then 4 more joined the party.

Now there are 13 puppies.

Thursday 7th January

WALT: *add by counting on*

Complete the sentences.



First there were

Next

More were added

The total is

Thursday 7th January

WALT: *add by counting on*

Pam has 10 jewels.

She is given some more.

Now she has 12 jewels.



How many jewels was she given? Circle the correct answer



1



2




3

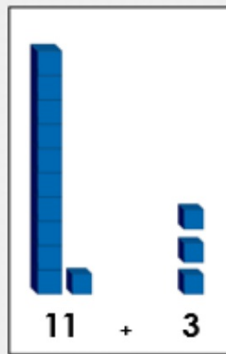
Thursday 7th January

WALT: add by counting on

Which is the odd one out?
Explain why.



1



2

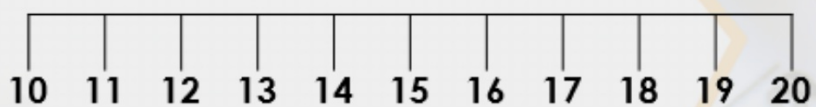


3

Thursday 7th January

WALT: add by counting on

Jay starts on 17 and adds on 3 more.





Jay says,



$$17 + 3 = 19$$

Is he correct? Explain why.



Thursday 7th January

WALT: add by counting on

Have a go at completing the activities,
choose Bronze, Silver or Gold.



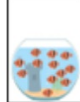
Year 1 Addition and Subtraction Fluency Silver 7/1/21
WALT: add by counting on

5a. Fat starts on 12.
She counts on 5.

10	11	12	13	14	15	16	17	18	19	20
----	----	----	----	----	----	----	----	----	----	----

What number will she land on?
★

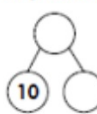
6a. True or false?

		
---	---	---

1. There were 8 fish in the bowl. 2. Next 4 more are added. 3. Now there are 14 fish in the bowl.



★

7a. Use the sentences to help you fill in the part whole model.

	At the start of the day there were 10 children. Then 3 more joined the group. Now there are 13 children.
---	--

★




8a. Complete the sentences.

	
---	---

Year 1 Addition and Subtraction PS & R Silver 7/1/21
WALT: add by counting on




4a. Mick has 11 cookies.
He is given some more.
Now he has 15 cookies.

How many cookies was he given?

		
A	B	C

★

5a. Which is the odd one out?
Explain why.

		
A	B	C

★

6a. Millie starts on 13 and adds on 5 more

10	11	12	13	14	15	16	17	18	19	20
----	----	----	----	----	----	----	----	----	----	----

Millie says: _____