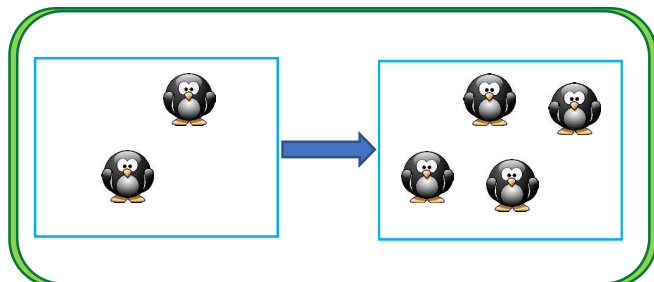
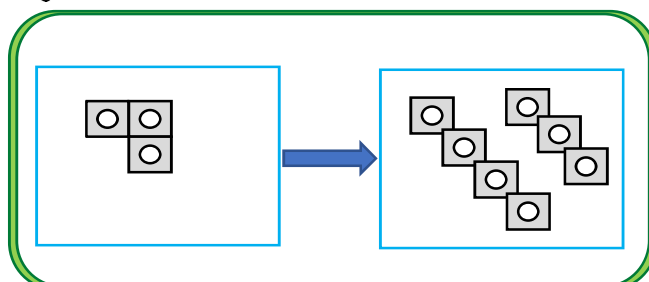
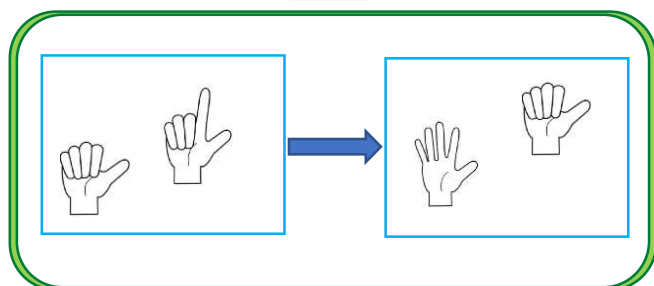
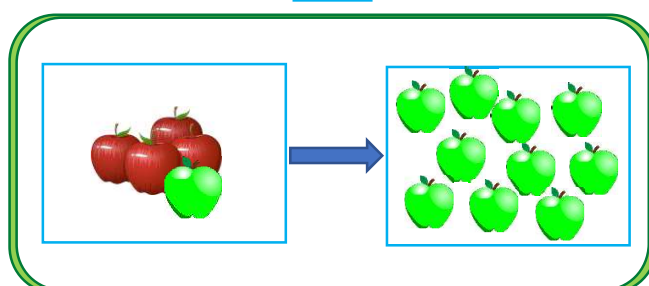
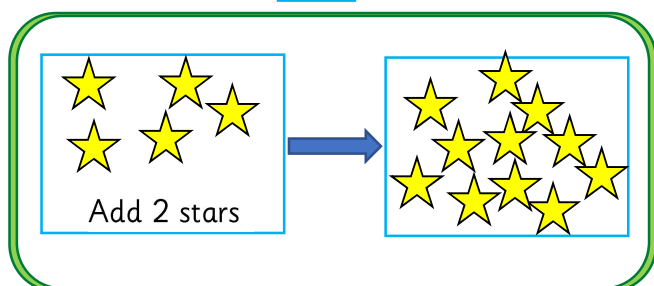
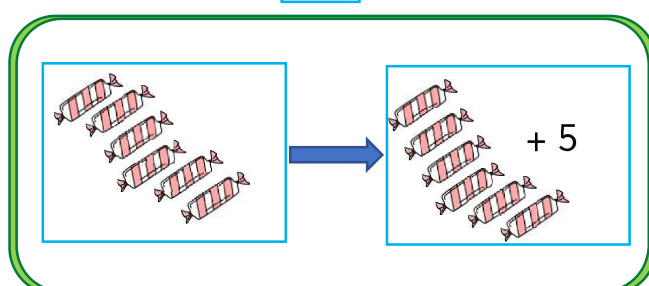




Tick to show the representations that have had their quantities doubled.
Cross and correct any incorrect ones.


☐

☐

☐

☐

☐

☐

Complete the sentences to show double the number.

I have 3 of these pieces. I double the total.



Double ____ is ____

I have five of these pieces and take away three pieces. I then double the total.



Double ____ is ____

I have 7 of these pieces and take away 4 pieces.
I then double the total.



Double ____ is ____

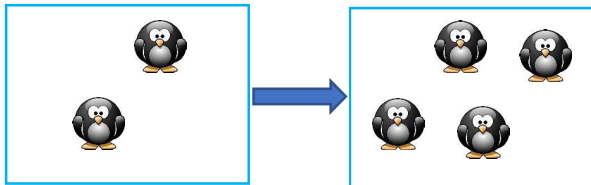
I have seven of these pieces. I double the total.



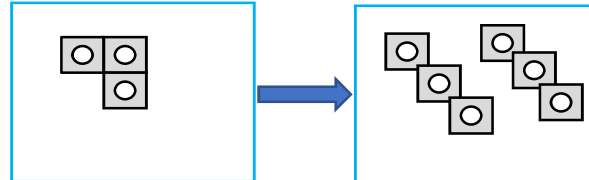
Double ____ is ____



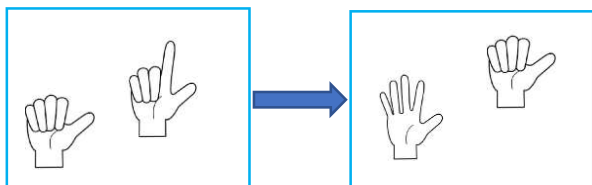
Tick to show the representations that have had their quantities doubled.
Cross and correct any incorrect ones.



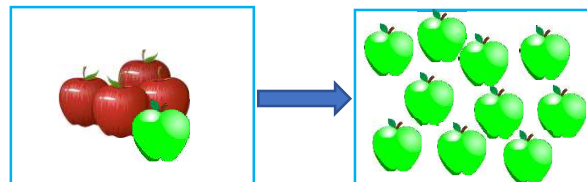
✓



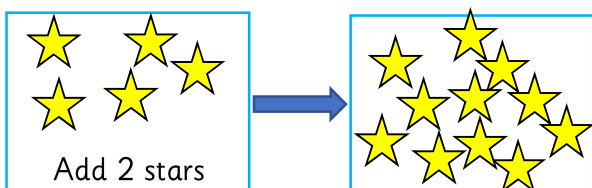
✓



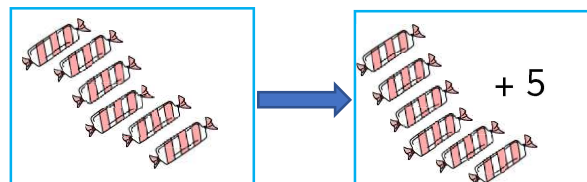
✓



✓



✗



✗

Complete the sentences to show double the number.

I have 3 of these pieces. I double the total.



Double 9 is 18

I have five of these pieces and take away three pieces. I then double the total.



Double 8 is 16

I have 7 of these pieces and take away 4 pieces.
I then double the total.



Double 6 is 12

I have seven of these pieces. I double the total.



Double 7 is 14