

12/1/21

WALT: make doubles

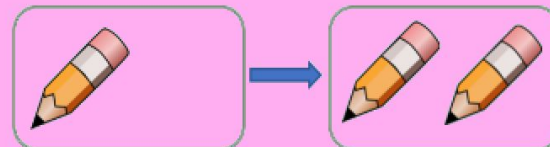
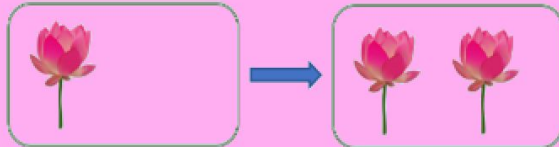
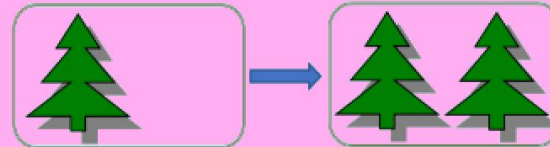
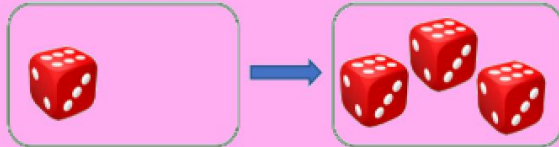
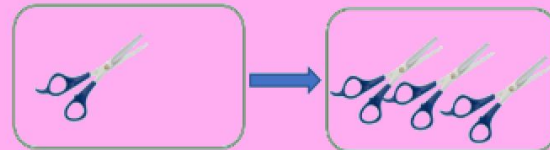
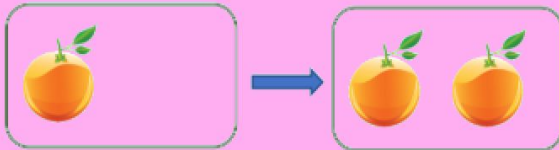
Can you remember any doubles?

Can you remember any doubles by memory?

12/1/21

WALT: make doubles

Circle the representations which have been doubled.

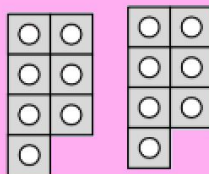


Look at the number shapes.



7

Double 7 is 14.

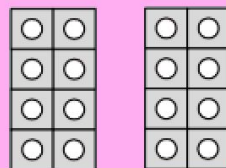


$$7 + 7 = 14$$



8

Double 8 is _____.



You take a number shape and double it.
Complete the sentence.

12/1/21

WALT: make doubles

Complete the table by doubling each number.

1	
2	
3	
4	
5	
6	
7	
8	
9	
10	

?

What patterns do you notice?

12/1/21

WALT: make doubles

Making Doubles ☆ Fluency & Precision 1

Tick to show the representations that have been doubled. Cross the ones that have not been doubled.

☐

☐

☐

☐

☐

☐

Complete the sentences to show double the number.

Double 10 is _____

Double 7 is _____

Double 8 is _____

Double 3 is _____

Bronze

12/1/21

WALT: make doubles

Making Doubles ☆☆☆ Fluency & Precision 1

Tick to show the representations that have been doubled. Cross the ones that have not been doubled.

☐

☐

☐

☐

☐

☐

Complete the sentences to show double the number.

Double ____ is ____

Double ____ is ____

Double ____ is ____

Double ____ is ____

Double ____ is ____

Double ____ is ____

© 2018 Pearson Education Ltd

Silver

12/1/21

WALT: make doubles

Making Doubles☆☆☆☆

Fluency & Precision1

Tick to show the representations that have had their quantities doubled.
Cross and correct any incorrect ones.

 <input type="checkbox"/>	 <input type="checkbox"/>
 <input type="checkbox"/>	 <input type="checkbox"/>
 <input type="checkbox"/>	 <input type="checkbox"/>

Complete the sentences to show double the number.

I have 3 of these pieces. I double the total. Double ____ is ____	I have five of these pieces and take away three pieces. I then double the total. Double ____ is ____
I have 7 of these pieces and take away 4 pieces. I then double the total. Double ____ is ____	I have seven of these pieces. I double the total. Double ____ is ____

Gold