



14/1/21

WALT: make equal groups

What did we do last lesson?



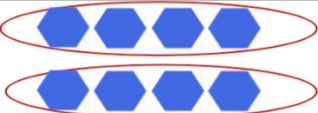



Can all numbers make equal groups of 2?



14/1/21

WALT: make equal groups

Complete the sentences.

Representation	Description
	There are _____ altogether. There are _____ equal groups of _____.
	There are _____ altogether. There are _____ equal groups of _____.
	12 has been sorted into _____ equal groups of _____.
	_____ has been sorted into _____ equal groups of _____.

14/1/21

WALT: make equal groups


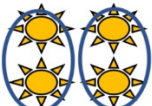

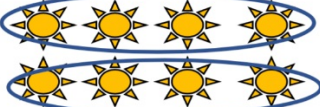

Think of a number between 20 and 30. You can only make equal groups of 5.

- What must the number be?
- What happens when you try to make groups of 2 with it?
- What happens when you try to make groups of 10 with it?

14/1/21

WALT: make equal groups




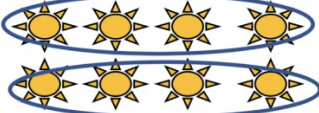

Bronze

Make Equal Groups - Grouping ☆	
Fluency & Precision 1	
Complete the table.	
Representation	Description
	8 has been sorted into 2 equal groups of 4.
	4 has been sorted into _____ equal groups of _____.
	2 has been sorted into _____ equal groups of _____.
	8 has been sorted into _____ equal groups of _____.
	10 has been sorted into _____ equal groups of _____.

14/1/21

Silver


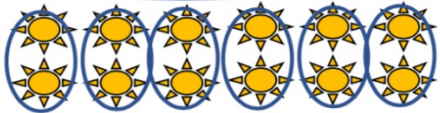



WALT: make equal groups

Make Equal Groups - Grouping ☆☆☆	
Fluency & Precision 1	
Complete the table.	
Representation	Description
	8 has been sorted into 2 equal groups of 4.
	___ has been sorted into ___ equal groups of ____.
	___ has been sorted into ___ equal groups of ____.
	___ has been sorted into ___ equal groups of ____.
	___ has been sorted into ___ equal groups of ____.

14/1/21

Gold

WALT: make equal groups

Make Equal Groups - Grouping ☆☆☆		Fluency & Precision 1
Complete the table.		
	8 has been sorted into 2 equal groups of 4.	
	____ has been sorted into ____ equal groups of _____.	
	15 has been sorted into 3 equal groups of 5.	
	20 has been sorted into 4 equal groups of 5.	
	____ has been sorted into ____ equal groups of _____.	

14/1/21

WALT: make equal groups

14/1/21

WALT: make equal groups

14/1/21

WALT: make equal groups

14/1/21

WALT: make equal groups

