

Answer the questions below. Use drawings to help you answer.


Leanna has 4 apples. She shares them equally between 2 bowls.
How many are in each bowl?




Tia has 5 bananas. She shares them equally between 5 boxes.
How many are in each box?




Mal has 10 books. He shares them equally between 2 shelves.
How many are on each shelf?



Rosie has 10 marbles. She shares them equally between 5 jars.
How many are in each jar?




Zach has 10 fish. He shares them equally between 10 fish bowls.
How many are in each bowl?



Answer the questions below. Use drawings to help you answer.

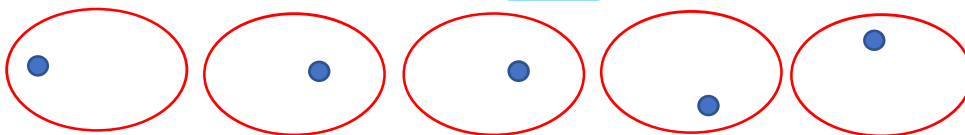
Leanna has 4 apples. She shares them equally between 2 bowls.
How many are in each bowl?

2




Tia has 5 bananas. She shares them equally between 5 boxes.
How many are in each box?

1



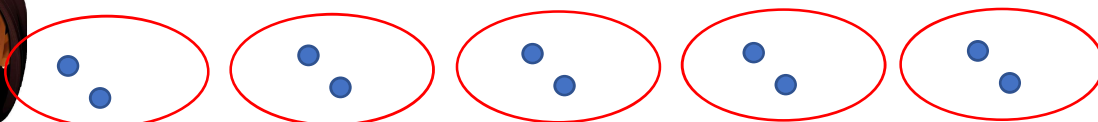
Mal has 10 books. He shares them equally between 2 shelves.
How many are in on each shelf?

5



Rosie has 10 marbles. She shares them equally between 5 jars.
How many are in each jar?

2



Zach has 10 fish. He shares them equally between 10 fish bowls.
How many are in each bowl?

1

