

Answer the questions below. Use drawings to help you answer.



Leanna has 30 apples. She shares them equally between 2 bowls.  
How many are in each bowl?  How many are left over?



Tia has 21 bananas. She shares them equally between 4 boxes.  
How many are in each box?  How many are left over?



Mal has 24 books. He shares them equally between 2 shelves.  
How many are in on each shelf?  How many are left over?



Rosie has 28 marbles. She shares them equally between 5 jars.  
How many are in each jar?  How many are left over?





Zach has 10 fish. He shares them equally between 10 fish bowls.  
How many are in each bowl?  How many are left over?


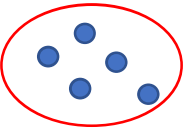

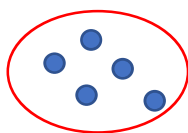
Answer the questions below. Use drawings to help you answer.



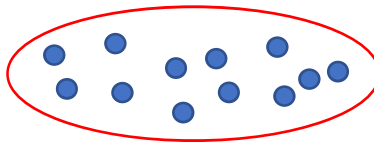

Leanna has 30 apples. She shares them equally between 2 bowls.  
How many are in each bowl? 15 How many are left over? 0



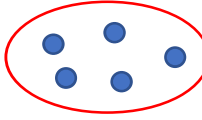



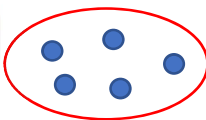
Tia has 21 bananas. She shares them equally between 4 boxes.  
How many are in each box? 5 How many are left over? 1



Mal has 24 books. He shares them equally between 2 shelves.  
How many are in on each shelf? 12 How many are left over? 0



Rosie has 28 marbles. She shares them equally between 5 jars.  
How many are in each jar? 5 How many are left over? 3



Zach has 10 fish. He shares them equally between 10 fish bowls.  
How many are in each bowl? 1 How many are left over? 0

