



Which one is the odd one out?

I have 10 apples and put them in to 2 baskets.



I have 10 apples and put them into 5 baskets.



I have 5 apples and put them into 2 baskets.



Explain your answer.

masterthecurriculum.co.uk

There are 20 sweets and 2 party bags.

An equal amount needs to be put into each party bag.



Zach



Tia


Share them into 2 groups.

Put them into groups of 2.


Who is correct? How do you know?

Which one is the odd one out?

I have 10 apples and put them in to 2 baskets.



I have 10 apples and put them into 5 baskets.



I have 5 apples and put them into 2 baskets.



Explain your answer.

masterthecurriculum.co.uk

There are 20 sweets and 2 party bags.

An equal amount needs to be put into each party bag.



Zach



Tia

Share them into 2 groups.


Put them into groups of 2.

Who is correct? How do you know?


Which one is the odd one out?

Range of answers.

I have 10 apples and put them in to 2 baskets.



I have 10 apples and put them into 5 baskets.



I have 5 apples and put them into 2 baskets.

This one leaves a remainder.



Explain your answer.

masterthecurriculum.co.uk

There are 20 sweets and 2 party bags.

An equal amount needs to be put into each party bag.



Zach

Share them into 2 groups.



Tia


Put them into groups of 2.

Who is correct? How do you know?


Which one is the odd one out?

Range of answers.

I have 10 apples and put them in to 2 baskets.



I have 10 apples and put them into 5 baskets.



I have 5 apples and put them into 2 baskets.

This one leaves a remainder.



Explain your answer.

masterthecurriculum.co.uk

There are 20 sweets and 2 party bags.

An equal amount needs to be put into each party bag.



Zach

Share them into 2 groups.



Tia

Put them into groups of 2.

Who is correct? How do you know?