

Answer the questions below. Use drawings to help you answer.



Leanna has 12 apples. She shares them equally between 2 bowls.  
How many are in each bowl?



Tia has 15 bananas. She shares them equally between 5 boxes.  
How many are in each box?



Mal has 20 books. He shares them equally between 2 shelves.  
How many are in on each shelf?



Rosie has 25 marbles. She shares them equally between 5 jars.  
How many are in each jar?



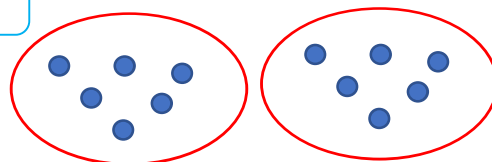
Zach has 10 fish. He shares them equally between 10 fish bowls.  
How many are in each bowl?

Answer the questions below. Use drawings to help you answer.



Leanna has 12 apples. She shares them equally between 2 bowls.  
How many are in each bowl?

6



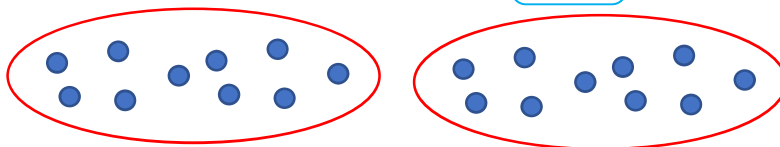
Tia has 15 bananas. She shares them equally between 5 boxes.  
How many are in each box?

3




Mal has 20 books. He shares them equally between 2 shelves.  
How many are in on each shelf?

10



Rosie has 25 marbles. She shares them equally between 5 jars.  
How many are in each jar?

5



Zach has 10 fish. He shares them equally between 10 fish bowls.  
How many are in each bowl?

1

