

Thursday 28<sup>th</sup> January 2020

Let's get warmed up and sing the following counting song.

<https://www.youtube.com/watch?v=xgH7gXfchGw>




Today we are going to be looking at length. Length means how long or tall something is.

Let's look at the Three Billy Goats Gruff from this week.

When something is standing up we use the words 'tall' and 'short'. When something is laid down, we use the words 'long' and 'short'.

Which billy goat is the tallest? Which is the shortest? Can you put them in order?




Which goat horn is the longest? Which is the shortest? Can you put them in order?



This time you have 4 things to put in size order.

Which troll is the tallest? Which is the shortest? Can you put them in order? Start with the tallest and shortest first and then decide where to place the middle two!



Which troll is **bigger** than troll number 4?

Which troll is **shorter** than troll number 4?

Use these stem sentences to describe the trolls...

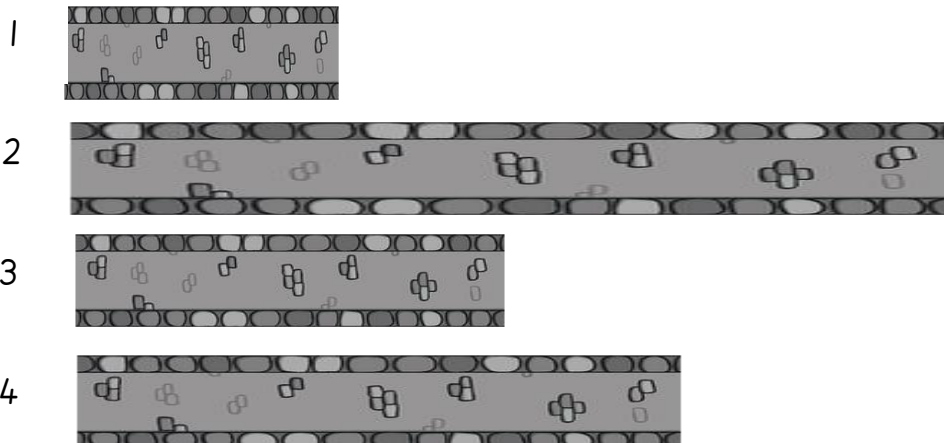
"Troll 2 is shorter than..."

"Troll 3 is taller than..."

"Troll 1 is taller than..."

"Troll 4 is shorter than..."

Look at the bridges. Which is the longest and which is the shortest? Put them in order from tallest to shortest.



Use the stem sentences to describe the bridges again.

Collect 3-4 objects from your house and practise lining them up in size order from the shortest to the tallest.