


Name: _____ Date: _____



Use the words at the bottom of the page to help you label the physical features in these Arctic landscapes.



mountain

coastline

ocean

lake

glacier

ice



hill

sea ice

Name: _____ Date: _____



Use the words at the bottom of the page to help you label the physical features in these Arctic landscapes.



glacier

mountain

ice

hill



sea ice

ocean

Name: _____ Date: _____



Use the words at the bottom of the page to help you label the physical features in these Arctic landscapes.



mountain

glacier


coastline

river

Name: _____ Date: _____




Can you cut out the statements and pictures from the physical features cards and match them to the correct feature icon?



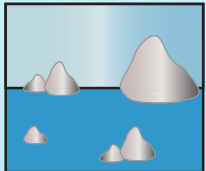
--	--	--	--	--	--	--	--	--	--

--	--	--	--	--	--	--	--	--	--



--	--	--	--	--	--	--	--	--	--

--	--	--	--	--	--	--	--	--	--




--	--	--	--	--	--	--	--	--	--

--	--	--	--	--	--	--	--	--	--




--	--	--	--	--	--	--	--	--	--

--	--	--	--	--	--	--	--	--	--



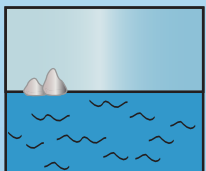
--	--	--	--	--	--	--	--	--	--

--	--	--	--	--	--	--	--	--	--



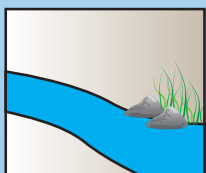
--	--	--	--	--	--	--	--	--	--

--	--	--	--	--	--	--	--	--	--



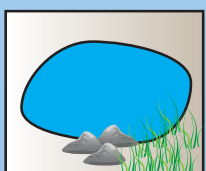
--	--	--	--	--	--	--	--	--	--

--	--	--	--	--	--	--	--	--	--



--	--	--	--	--	--	--	--	--	--

--	--	--	--	--	--	--	--	--	--



--	--	--	--	--	--	--	--	--	--

--	--	--	--	--	--	--	--	--	--



Cut out these cards and glue them next to the correct physical feature icon on worksheet 3B. These physical features are found in the Arctic.



Coastline

The edge of land next to the sea or ocean.



Glacier

Frozen river of water that moves very slowly.



River

Water that flows across the land




Mountain

A large, steep hill rising upwards.



Ocean

A large area of water.



Sea ice

Sheets of frozen water.



Lake

A body of water/ice found on land.



Iceberg

Large blocks of ice broken from glaciers.



Hill

Higher land but not as high as a mountain.



Challenge:

Once you have matched the cards find a partner to compare your work.
Can you explain what each feature is to your partner?
Can you explain how the Arctic landscape changes from summer to winter?

Good luck.

Name: _____ Date: _____




Choose three physical features found in the Arctic. Can you write a description and draw a picture to explain what each one is. The words at the bottom of the page will help you.

Word Bank


glacier	river	lake	ocean
large	sea ice	steep	flows
mountain	frozen	land	coastline
sheet	iceberg	water	melted
hills	blocks	high	snow



Woodland




Mountains



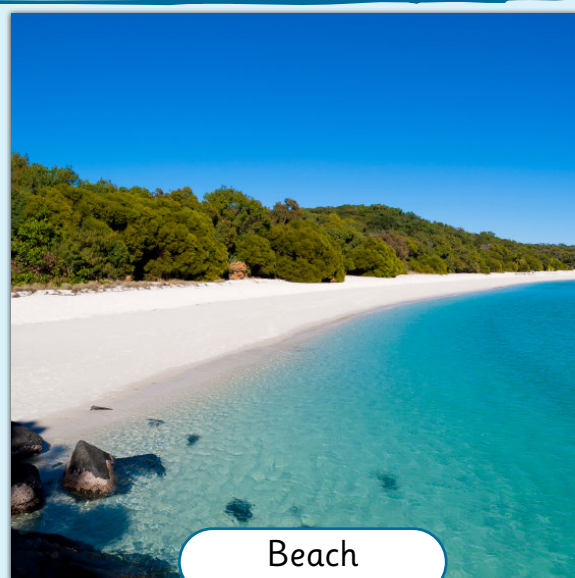
Jungle



Desert



City



Beach

Look at the landscape pictures. Imagine you are in each landscape. Use your senses to describe each landscape to your group.



How is each landscape similar and different to the Arctic landscape?

The five senses

What can you see?
What can you hear?
What can you smell?
What can you feel?
What can you taste?



Look at the landscape pictures. Imagine you are in each landscape. Use your senses to describe each landscape to your group.



How is each landscape similar and different to the Arctic landscape?

The five senses

What can you see?
What can you hear?
What can you smell?
What can you feel?
What can you taste?



Look at the landscape pictures. Imagine you are in each landscape. Use your senses to describe each landscape to your group.



How is each landscape similar and different to the Arctic landscape?

The five senses

What can you see?
What can you hear?
What can you smell?
What can you feel?
What can you taste?



Look at the landscape pictures. Imagine you are in each landscape. Use your senses to describe each landscape to your group.



How is each landscape similar and different to the Arctic landscape?

The five senses

What can you see?
What can you hear?
What can you smell?
What can you feel?
What can you taste?



Name: _____ Date: _____



Use the words at the bottom of the page to help you label the physical features in these Arctic landscapes.



mountain

coastline

ocean

lake

glacier

ice


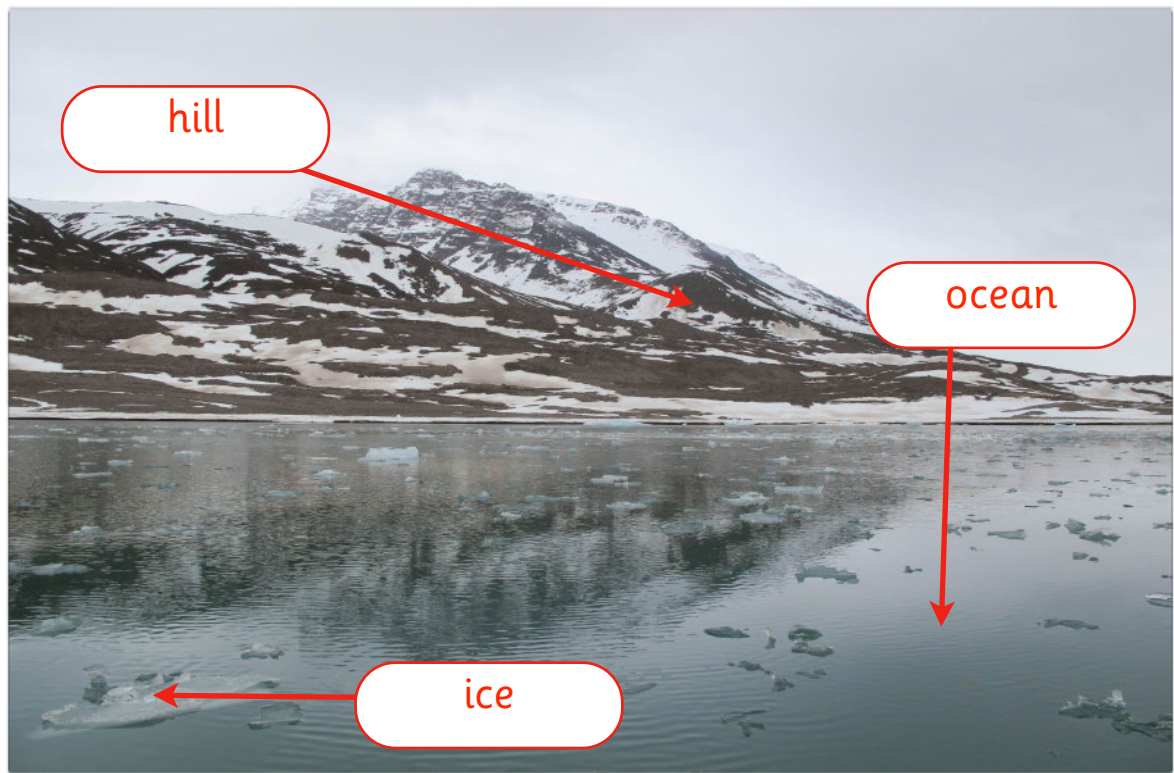
hill

sea ice

Name: _____ Date: _____



Use the words at the bottom of the page to help you label the physical features in these Arctic landscapes.



glacier

mountain

ice

hill

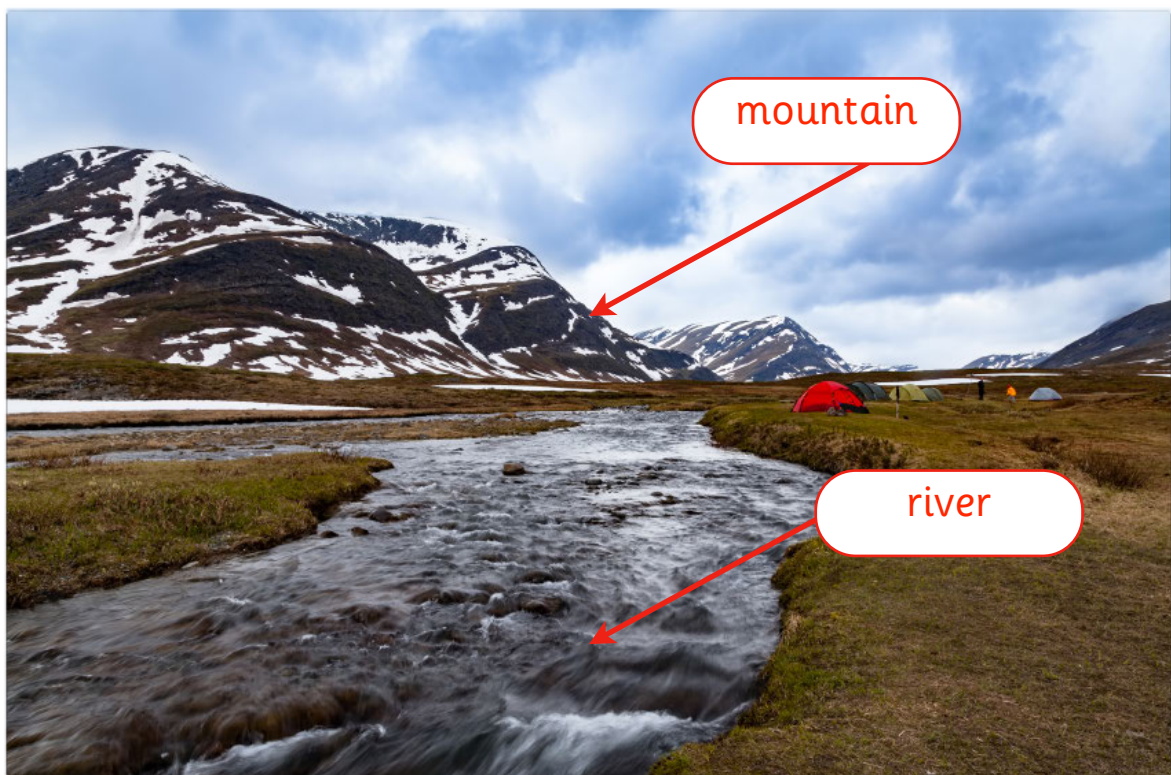
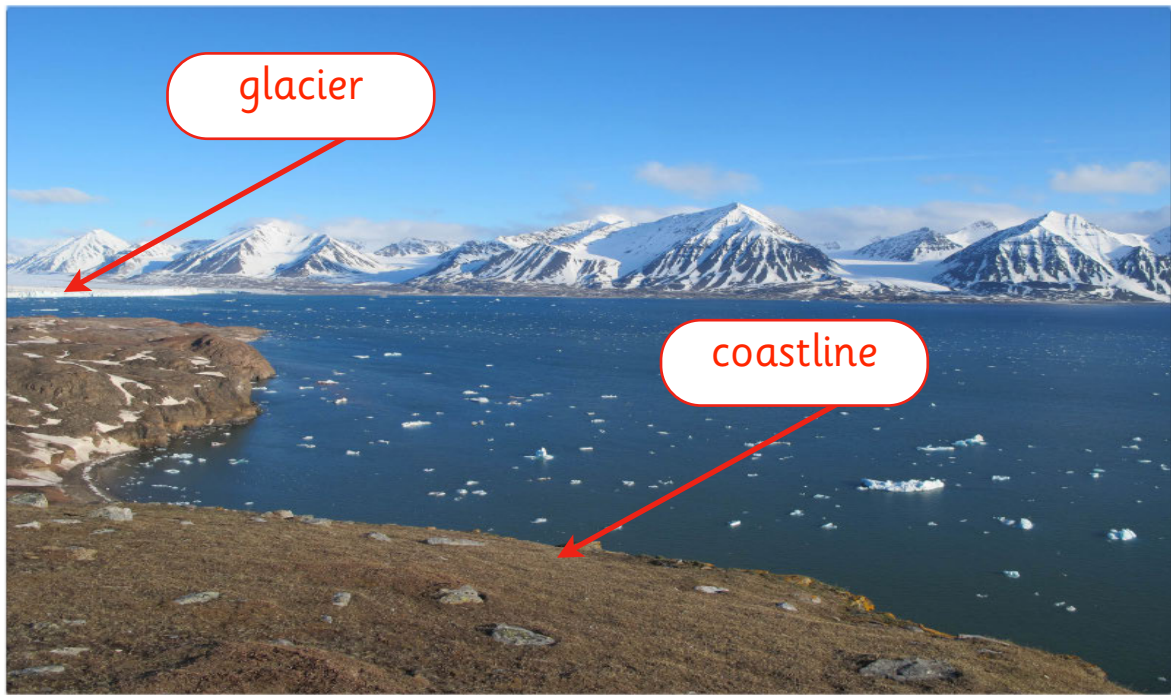
sea ice

ocean

Name: _____ Date: _____



Use the words at the bottom of the page to help you label the physical features in these Arctic landscapes.



mountain

glacier


coastline

river

Name: _____ Date: _____




Can you cut out the statements and pictures from the physical features cards and match them to the correct feature icon?



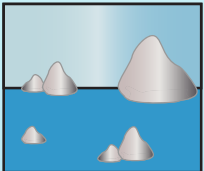
Mountain

A large, steep hill rising upwards.




Hill

Higher land but not as high as a mountain.




Iceberg

Large blocks of ice broken from glaciers.



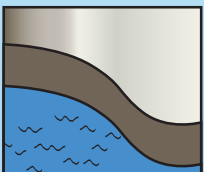
Sea ice

Sheets of frozen water.



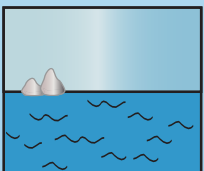
Glacier

Frozen river of water that moves very slowly.



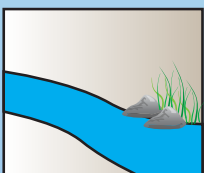
Coastline

The edge of land next to the sea or ocean.



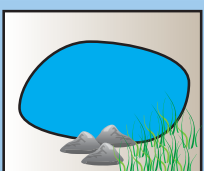
Ocean

A large area of water.



River

Water that flows across the land.



Lake

A body of water/ice found on land.

