


Yesterday we were dividing by 2, 5 and 10

Which number sentence is correct? A or B?


I have 12 apples.
I put them in bags of 2.
How many bags do I need?



A. $12 \div 2$

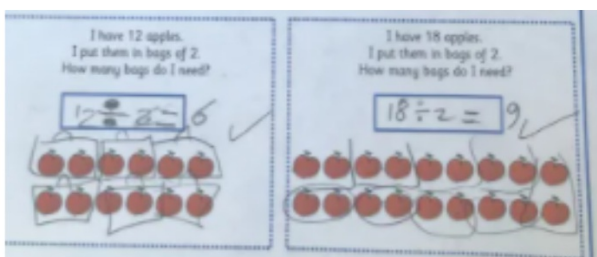
B. $2 \div 12$

There are 30 children in a classroom.
How many teams of 5 can I make?

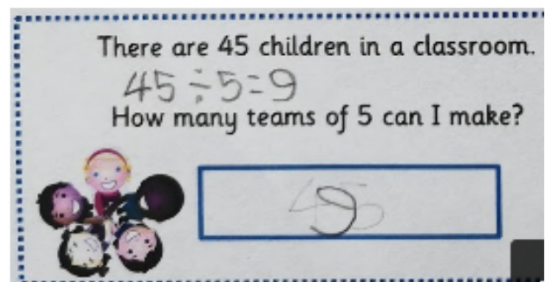


A. $5 \div 30$

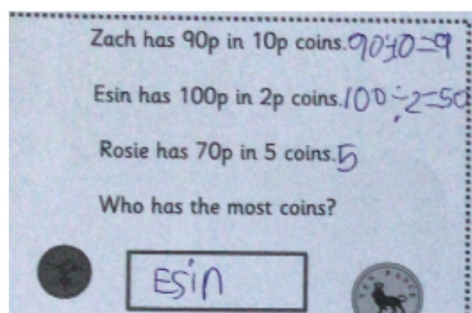
B. $30 \div 5$



Used pictures to help if needed



Understand the order of numbers in division sentences



Showed answers for each step

Show related multiplication and division sentences

WALT: Find *related* multiplication and division facts

Can you spot any related number facts here?

$$3 \times 2 = 6$$

$$5 \times 2 = 10$$

$$2 \times 3 = 6$$

$$2 \times 5 = 10$$

$$6 \div 2 = 3$$

$$6 \div 3 = 2$$


$$10 \div 5 = 2$$

$$10 \div 2 = 5$$

WALT: Find *related* multiplication and division facts

$$3 \times 2 = 6$$

3 groups of 2 = 6



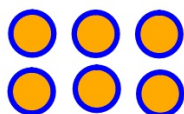
$$2 \times 3 = 6$$

2 groups of 3 = 6



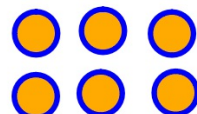
$$6 \div 2 = 3$$

6 divided into groups of 2 = 3 groups



$$6 \div 3 = 2$$

6 divided into groups of 3 = 2 groups



WALT: Find *related* multiplication and division facts

Bronze

Look for the numbers that you are using

ONLY USE THESE NUMBERS

$8 \times 10 = 80$	$10 \times 8 = 80$	$80 \div 10 = 8$	$80 \div =$
--------------------	--------------------	------------------	-------------

$7 \times 10 = 70$	$10 \times =$	$70 \div 10 = 7$	$70 \div =$
--------------------	---------------	------------------	-------------

WALT: Find *related* multiplication and division facts

Silver

Look for the numbers that you are using

ONLY USE THESE NUMBERS

$9 \times 2 = 18$	$\times \quad =$	$\div \quad =$	$\div \quad =$
-------------------	------------------	----------------	----------------

WALT: Find *related* multiplication and division facts

Gold

Look for the numbers that you are using

ONLY USE THESE NUMBERS

$3 \times 5 =$			
----------------	--	--	--