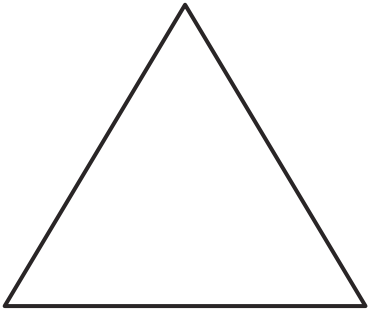
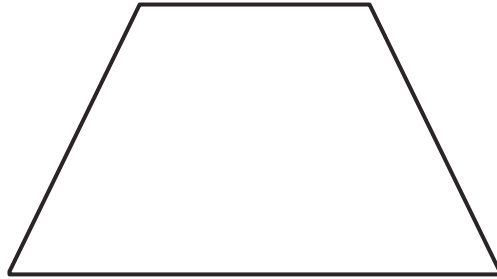


Mon 8th Feb - Name the 2D Shape




Name _____



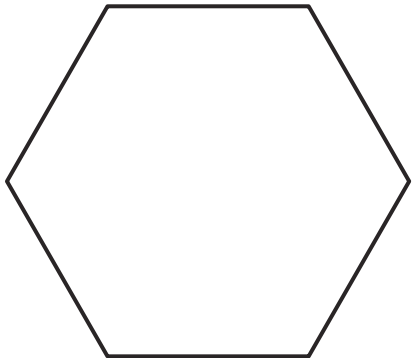
Name _____



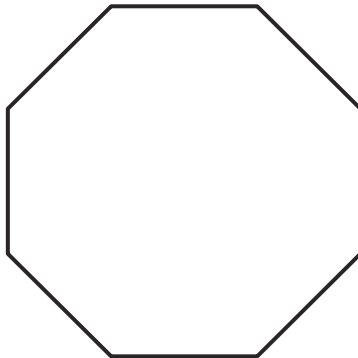
Name _____



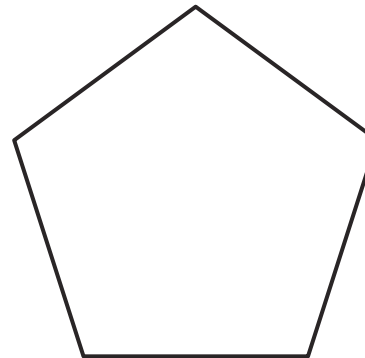
Name _____




Name _____



Name _____



Name _____



Name _____

Clues

Pentagon – 5 sides

Hexagon – 6 sides

Trapezium – 4 sides

Octagon – 8 sides


Pirate-Themed Spot the 2D Shape

What shapes can you find hidden around this pirate picture?

Can you find 4 circles?



Can you find 3 rectangles?



Can you find 2 triangles?



Can you find 1 square?

