


*Yesterday we were making our own 2D shapes*





*Some very good shapes made, used the correct amount of items per shape*



*If we are making our square bigger, the sides have still got to be equal in length*

WALT: Count the sides on 2D shapes

Match up the names with the correct shapes



hexagon  
pentagon  
heptagon  
square  
octagon



How do we know? what is different about all of these shapes?

WALT: Count the sides on 2D shapes

How many sides does a square have?

How can I make sure I don't count the same side twice?

How many sides does a hexagon have?



WALT: Count the sides on 2D shapes

Have a go at these shapes at home...

How many sides does a triangle have?



How many sides does a pentagon have?

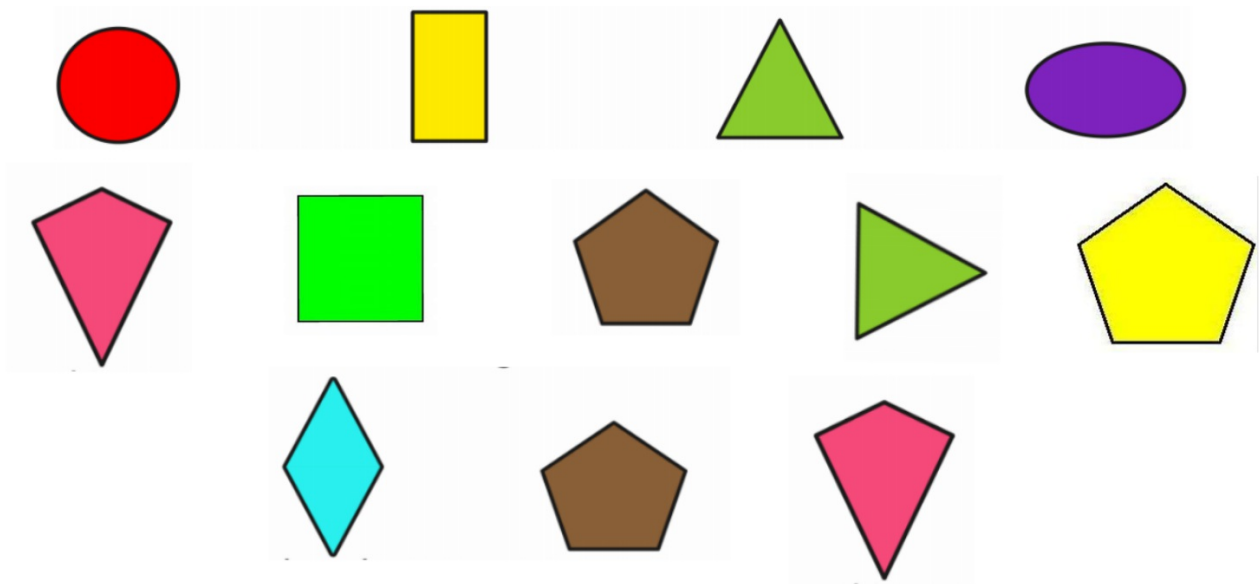


WALT: Count the sides on 2D shapes

How many sides does a star have?



WALT: Count the sides on 2D shapes



How many 3 sided shapes are there?

3 sides	
4 sides	
5 sides	

