



Tuesday 2<sup>nd</sup> March 2021

[Counting to 20 - Learn to count from 1 to 20 - Nursery Rhymes - Toobys - YouTube](#)



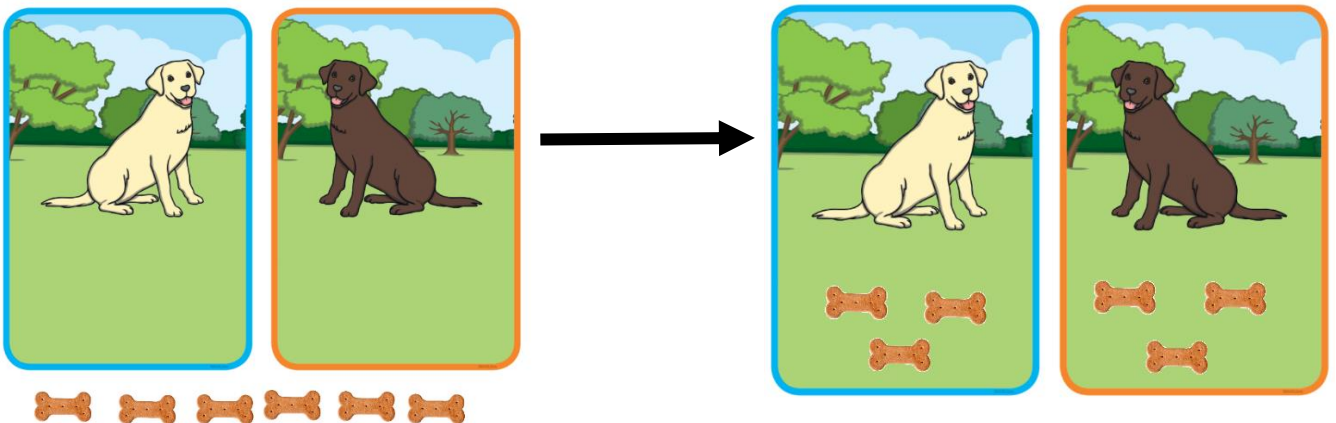
Today we are going to do some more halving. Let's recap yesterday's learning first.

Which of the following is showing a half? How do you know?



Today we are going to half some numbers. Use some counting equipment from home to help you answer the following...

I have 6 dog bones and I want to half them between the two dogs, Rocco and Mabel.

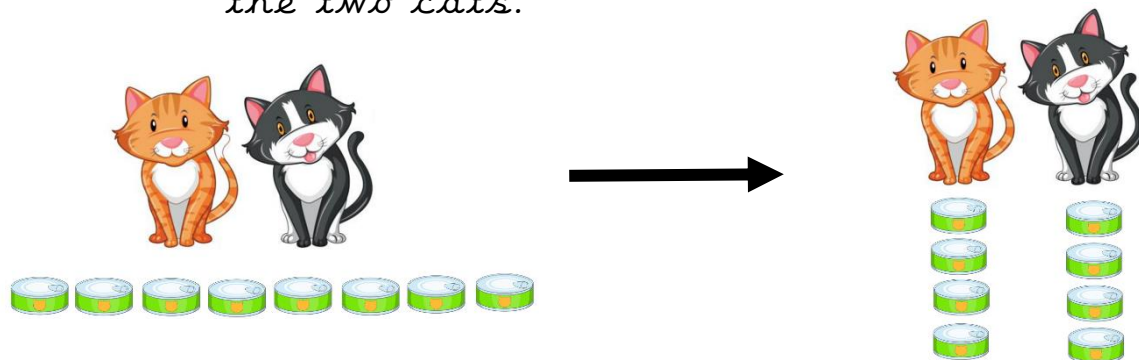


Share them out equally between the two dogs.

Half of 6 is 3.


There are 3 bones for each dog. This is fair and equal.

I have 8 tins of cat food. I need to half them between the two cats. What is half of 8? Share them out equally between the two cats.



Do each cat have the same amount? Each cat gets 4 tins of food. Half of 8 is 4. This is fair and equal.

The rabbits are being given 4 carrots. Half them so they get the same amount.



Half of 4 is 2.

Can you half the 10 apple pieces between the 2 hamsters?  
How many do each hamster get? What is half of 10?

