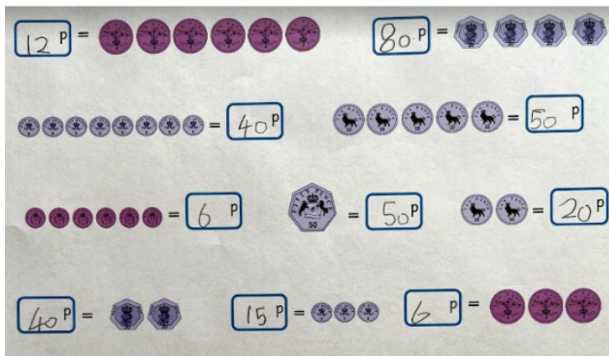


Yesterday, we were counting money in pence



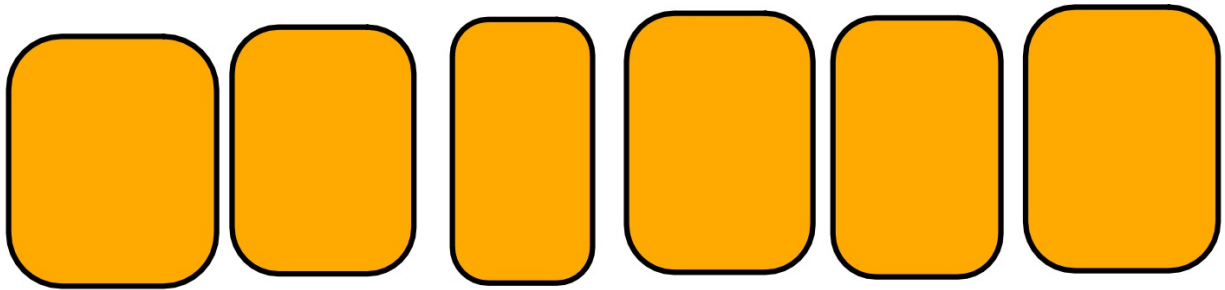
Great counting in 2s, 5s and 10s when counting money



Excellent working out to compare money

Make sure we start counting the multiples of 10 first

WALT: Count Pounds



£5
five pounds



£10
ten pounds



£20
twenty pounds



£50
fifty pounds

WALT: Count Pounds

Can we put these pound coins and notes in order of value

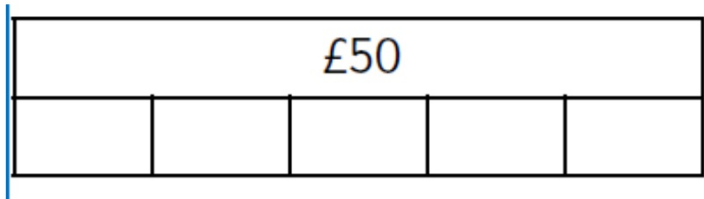
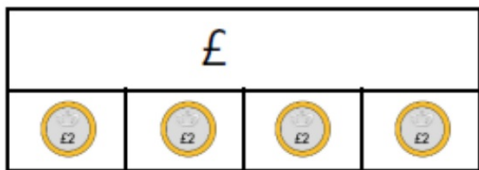


Lowest
Value

Greatest
Value

WALT: Count Pounds

Can we fill in these bar models to show the correct amount of money



WALT: Count Pounds

*Ernie thinks she has £36
Is she correct?*



