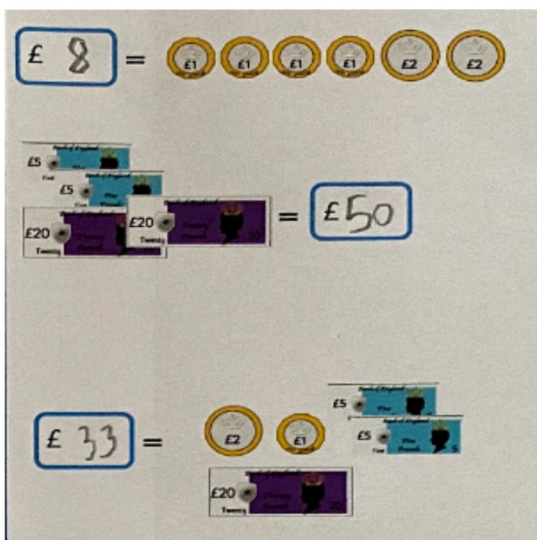
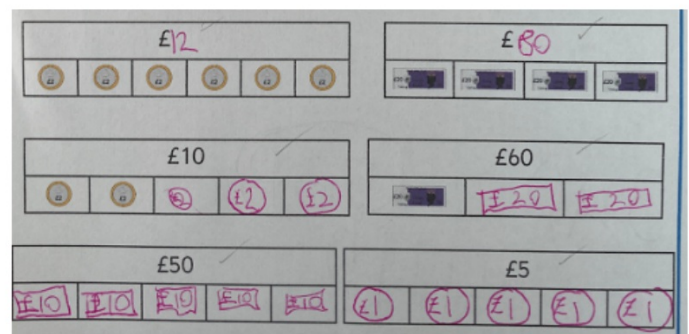


Yesterday, we were counting money in pounds



You counted in different amounts



You divided money into equal amounts in bar models

Count pounds and pence together

WALT: Count pounds and pence



1p
one penny



2p
two pence



5p
five pence



10p
ten pence



20p
twenty pence



50p
fifty pence



£1
one pound



£2
two pounds



£5
five pounds



£10
ten pounds



£20
twenty pounds



£50
fifty pounds

WALT: Count pounds and pence

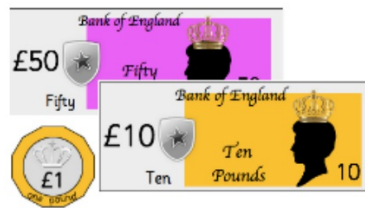


How many pounds do we have?



WALT: Count pounds and pence

How much money do we have?

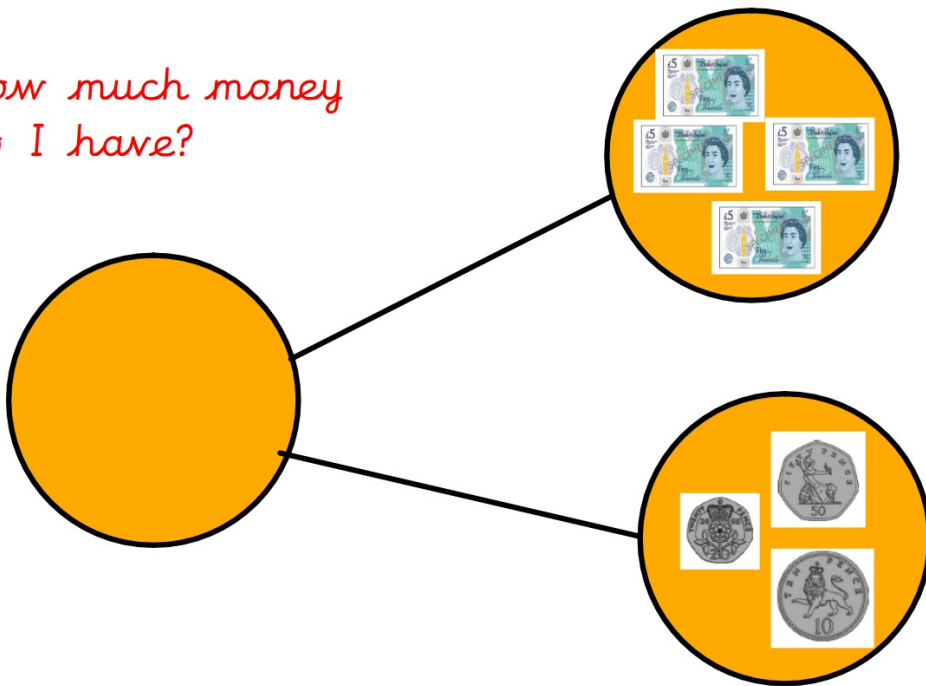


There is £ _____ and _____ p



WALT: Count pounds and pence

How much money
do I have?



WALT: Count pounds and pence

I have £5 and 10 pence
The rest is Rosie's



How much money does Rosie have?

WALT: Count pounds and pence

Show two ways to complete the part-whole model by drawing money.

