

Recognise coins

1 Match each coin to its value.



20 pence

5 pence

10 pence

1 pound

1 penny

50 pence

2 pence

2 pounds

2 Here are some coins.



Complete the sentences.

There are 1 penny coins.

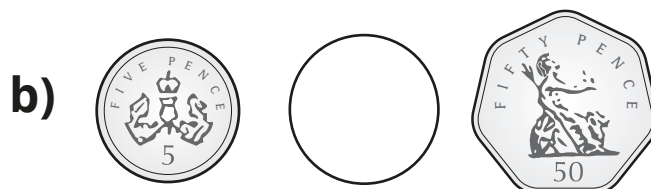
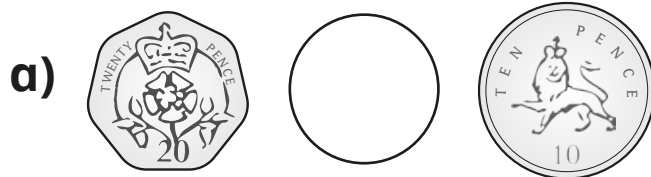
There are 2 pence coins.

There is 5 pence coin.

There are 10 pence coins.


There are 20 pence coins.

3 Write $<$ or $>$ to compare the amounts.





4 Mo has one coin in his hand.



I have more than 2 pence, but less than 1 pound.

Draw Mo's coin.

What is the value of Mo's coin? pence

Is there more than one answer?

