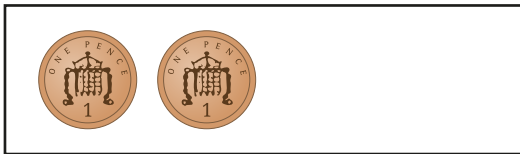


1 How much money is there?

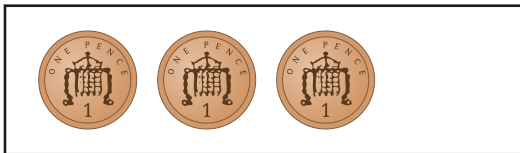
a)



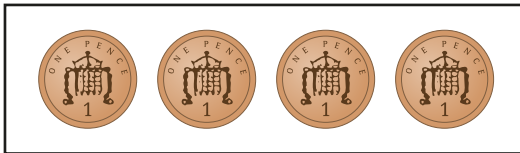
pence



pence



pence




pence

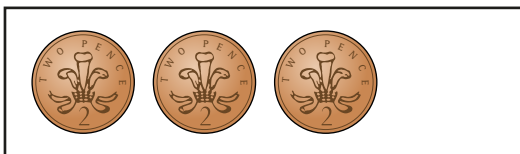
b)



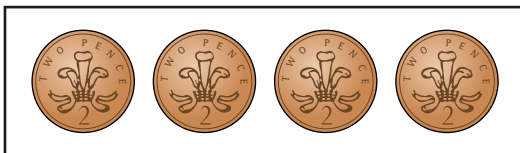
pence



pence




pence



pence

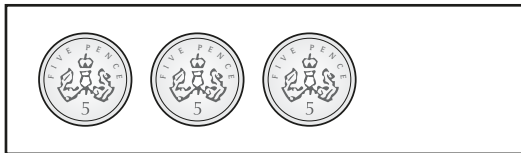
c)



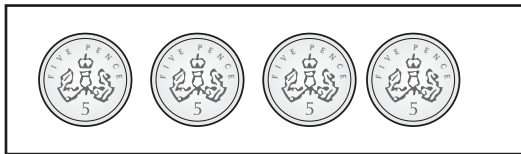
pence



pence



pence



pence

d)



pence



pence



pence



pence

2

How much money is there?

a)



pence

b)



pence



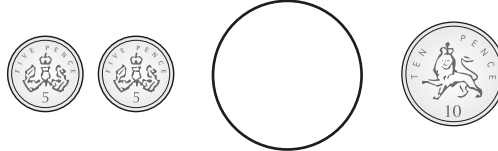


3 Write $<$, $>$ or $=$ to compare the amounts.

a)



b)




c)



4 Ron has nine 2 pence coins.

Jo has three silver coins.



Ron

I must have more money because I have more coins.

Do you agree with Ron? _____

Talk about your answer.