
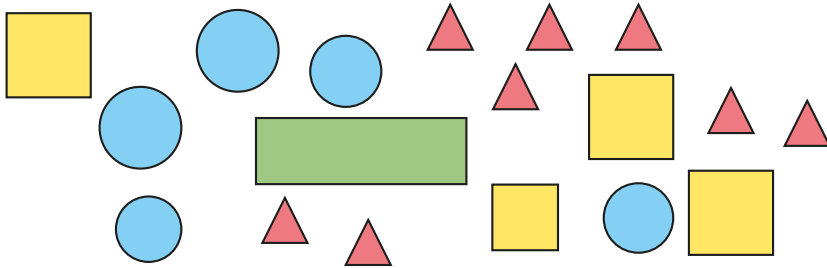




The rulers have been drawn for you.



4 Here are some shapes.



a) Complete the tally chart to show how many of each shape there are.

Shape	Tally	Total
circle		
rectangle		
square		
triangle		


b) How did you do the tallying?  
Compare with a partner.



5 Sam, Ron and Mo tally how many jumps they can do in a minute.

Name	Tally
Sam	###
Ron	
Mo	

a)



Sam

My total is 11

Do you agree with Sam?

Explain your reasons.

b) How can Ron improve his tally marks?

6 Make a tally chart for a topic of your choice.  
Compare charts with a partner.

